

NOME: _____

TURMA: _____


ATIVIDADE SOBRE AS HORAS

1) LIGUE O RELÓGIO DIGITAL CUJO O HORÁRIO MARCADO ESTEJA DE ACORDO COM O RELÓGIO ANALÓGICO:

23:30

•

•



21:50

•


•



16:10

•


•



10:00

•

•



2) QUE HORAS SÃO?




__ : __



__ : __



__ : __



__ : __