

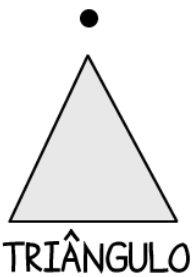


NOME: _____

TURMA: _____

ATIVIDADES DE MATEMÁTICA

1) LIGUE CADA OBJETO COM A FIGURA COM A QUAL ELE MAIS SE PARECE:



2) DESCUBRA QUAL DOS OBJETOS QUE BINHO USOU PARA DESENHAR O CÍRCULO:

