

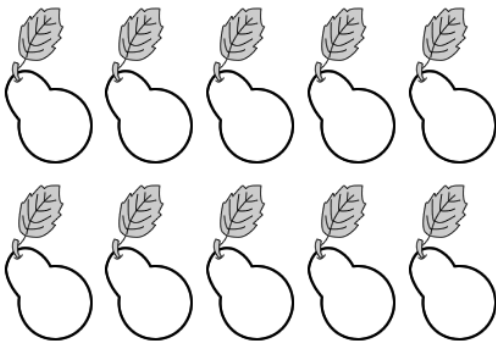
NOME: \_\_\_\_\_

TURMA: \_\_\_\_\_

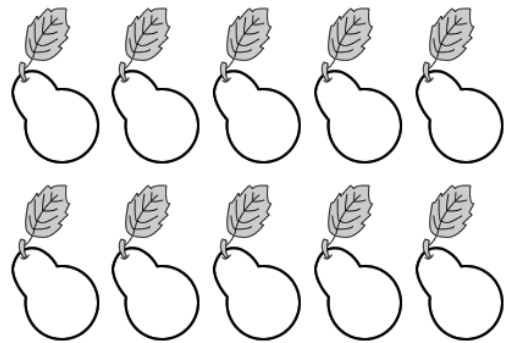
### ATIVIDADES DE MATEMÁTICA

1) PINTE A QUANTIDADE DE PÊRAS INDICADA EM CADA CASO:

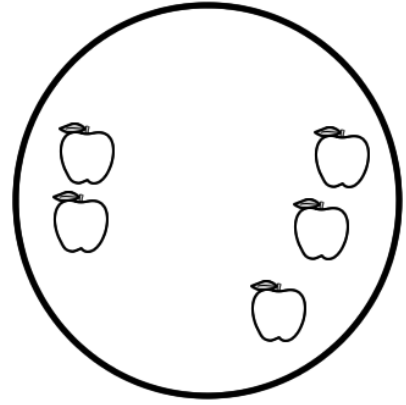
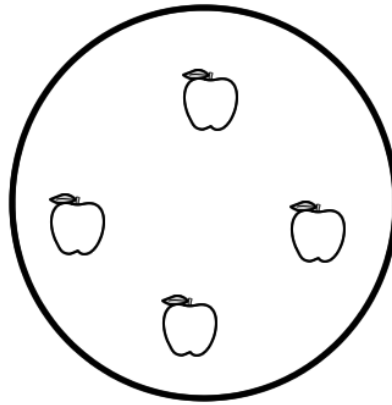
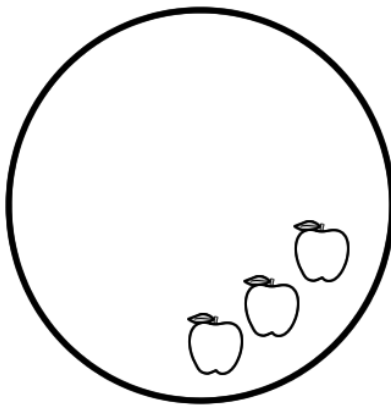
**9 - NOVE**



**10 - DEZ**



1) COMPLETE, DESENHANDO MAÇÃS, DE MANEIRA QUE CADA CONJUNTO FIQUE COM 9 ELEMENTOS



4) CONTINUE A ESCREVER OS NÚMEROS QUE VOCÊ ACABOU DE APRENDER:

9

10